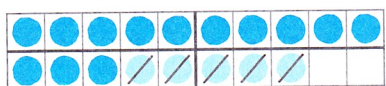


1




$$18 - 5 = 13$$

$$13 + 5 = \underline{\quad}$$



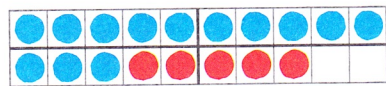
$$16 - 2 = \underline{\quad}$$

$$\underline{\quad} + 2 = \underline{\quad}$$




$$19 - 8 = \underline{\quad}$$

$$\underline{\quad} + \underline{\quad} = \underline{\quad}$$



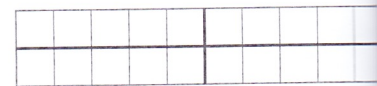
$$13 + 4 = \underline{\quad}$$

$$\underline{\quad} - 4 = \underline{\quad}$$



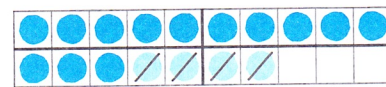

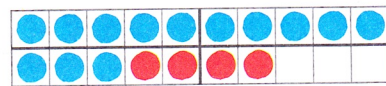
$$11 + 9 = \underline{\quad}$$

$$\underline{\quad} - 9 = \underline{\quad}$$



$$15 + 0 = \underline{\quad}$$

$$\underline{\quad} - \underline{\quad} = \underline{\quad}$$



2

$$15 - 2 = 13$$

$$13 + \underline{\quad} = \underline{\quad}$$

$$20 - 5 = \underline{\quad}$$

$$17 - 6 = \underline{\quad}$$

$$14 - 4 = \underline{\quad}$$

$$19 - 1 = \underline{\quad}$$

$$12 - 0 = \underline{\quad}$$

$$18 - 7 = \underline{\quad}$$

$$19 - 3 = \underline{\quad}$$

$$14 + 3 = 17$$

$$17 - \underline{\quad} = \underline{\quad}$$

$$15 + 4 = \underline{\quad}$$

$$12 + 8 = \underline{\quad}$$

$$10 + 6 = \underline{\quad}$$

3

Verbinde jede Aufgabe mit ihrer Umkehraufgabe.



$$15 + 3 = 18$$

$$19 - 2 = \underline{\quad}$$

$$14 + 6 = \underline{\quad}$$

$$12 + 7 = \underline{\quad}$$

$$13 + 5 = \underline{\quad}$$

$$18 - 5 = \underline{\quad}$$

$$19 - 7 = \underline{\quad}$$

$$18 - 3 = \underline{\quad}$$

$$20 - 6 = \underline{\quad}$$

$$17 + 2 = \underline{\quad}$$

$$20 - 4 = \underline{\quad}$$

$$16 + 4 = \underline{\quad}$$